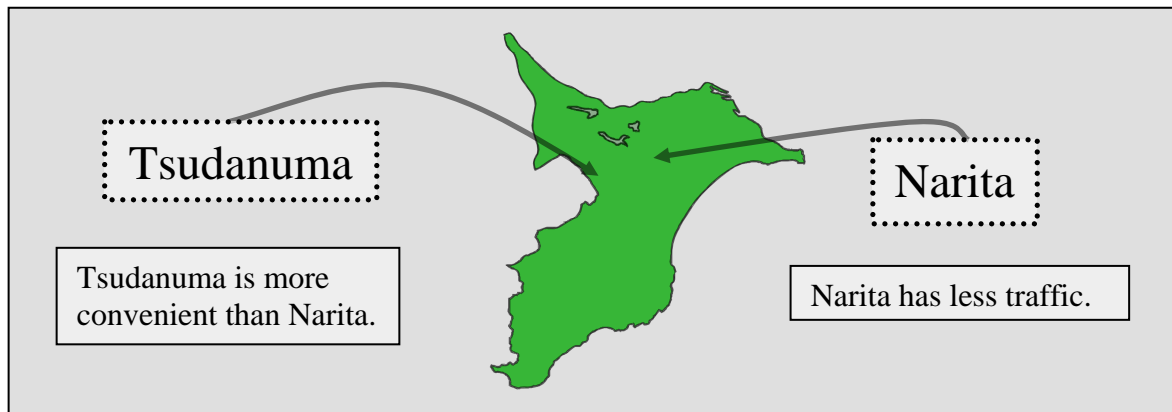





Compare the two cities by filling in the gaps below



- 1 Tsudanuma is _ _ _ _ _ c _ _ _ d _ _ d than Narita.
- 2 Narita is _ u _ e t _ r than Tsudanuma.
- 3 There are _ _ _ _ _ p _ _ p _ e in Tsudanuma.
- 4 Tsudanuma is c _ _ s _ r to Tokyo than Narita.
- 5 Tsudanuma's public transportation is _ _ _ _ _ c _ _ v _ n _ _ n _ .
- 6 Narita is _ _ _ _ _ t _ _ _ _ t _ _ _ _ l than Tsudanuma.
- 7 The people in Narita are f _ _ _ _ d _ _ e r than people in Tsudanuma.
- 8 Narita has _ _ _ _ _ c r _ m _ than Tsudanuma.
- 9 Narita is not as i n _ _ _ e _ t _ _ g as Tsudanuma at night.
- 10 _ _ _ _ _ people ride b _ _ _ _ _ on the sidewalks in Narita.



Use the pictures as hints